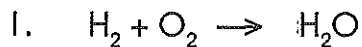


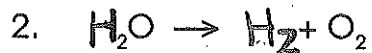
Name \_\_\_\_\_

# Classification of Chemical Reactions

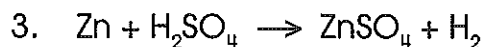
Identify each reaction as *synthesis*, *decomposition*, ~~transformation~~ *single replacement*, or *double replacement*.



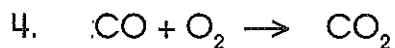
---



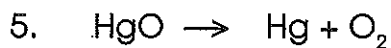
---



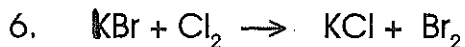
---



---



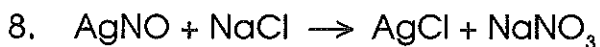
---



---



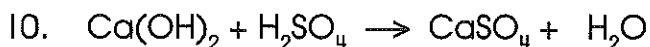
---



---



---



---